

2 Physics Skill

NAME _____

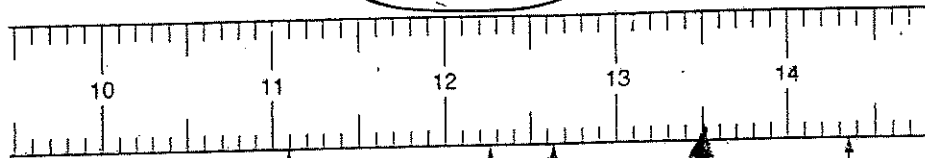
(2)

Significant digit figures

For the instruments shown below, record the correct reading.

1.

Metric Ruler



13.50

13.50X

13.50X

13.50cm

11.09

11.10

14.35

12.25

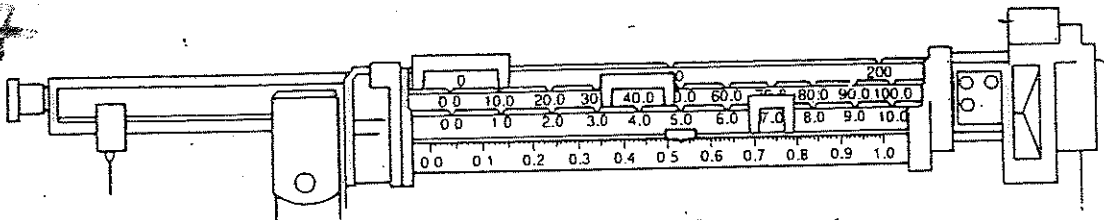
12.62

a. b. c. d. e.

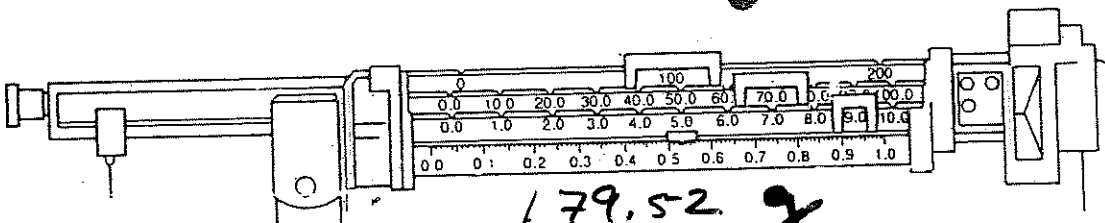
Balance

12.63

13.477



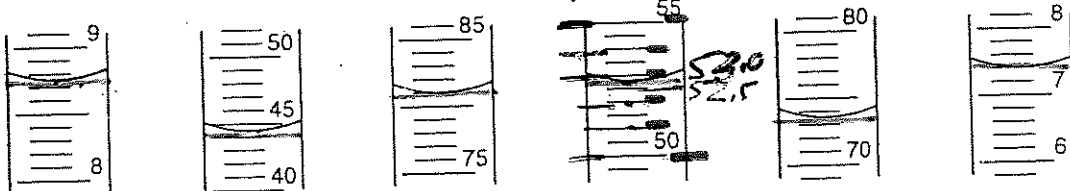
a. 47.53g



179.52
179.53

3.

Graduated Cylinder



a. 8.76
8.75

b. 44.5
44.6

c. 81.0

d. 52.8
52.5
A

e. 73.7

f. 7.40

